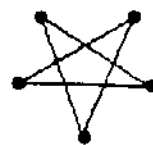
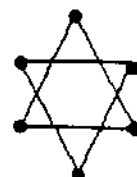


★★ 2. How many points are on this star? _____



How many points are on this star? _____



★ 3. Color the star above that has more points.

★★★★ 4.

| | | | | | | | | | |
|---|---|---|---|---|---|---|--|--|--|
| ○ | ○ | ○ | ○ | ○ | ○ | | | | |
| ★ | ★ | | | | | | | | |
| □ | □ | □ | □ | □ | □ | □ | | | |
| | | | | | | | | | |

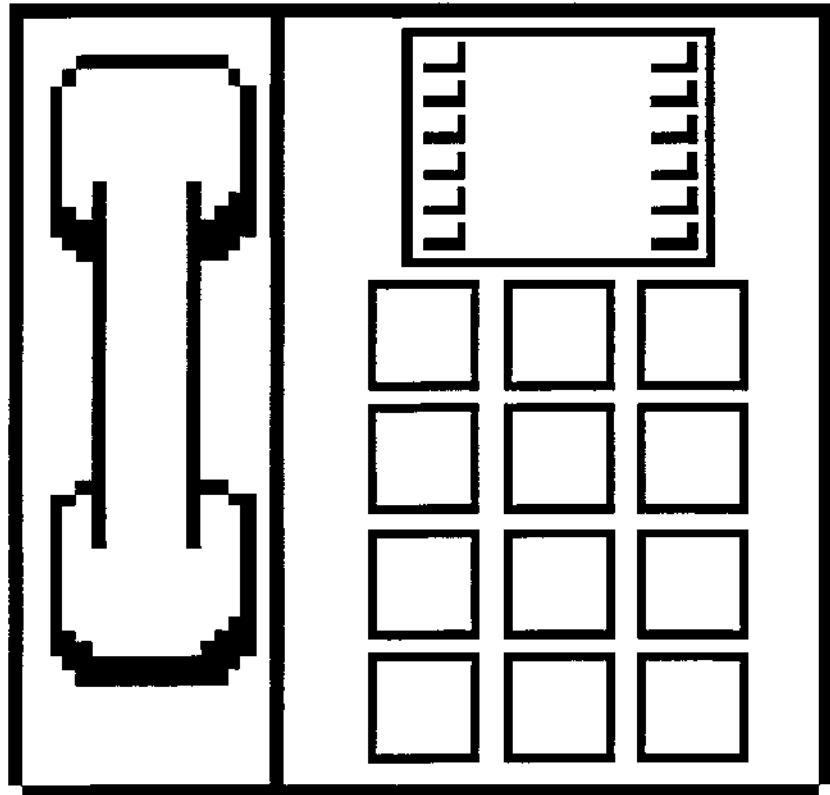
How many circles (○) are there? _____

How many squares (□) are there? _____

How many stars (★) are there? _____

Put a ✓ for each year old you are, in the bottom row.

- ★★★ 5. Look at a telephone. Put numbers on the buttons below.



- ★★ 6. Draw a line from the problem to the correct answer.

5 4 3

$\begin{matrix} \bullet & + & \bullet & = & ? \\ \bullet & & \bullet & & \end{matrix}$

 $\begin{matrix} \bullet & + & \bullet & = & ? \\ \bullet & & \bullet & & \end{matrix}$

$\begin{matrix} \bullet & + & \bullet & = & ? \\ \bullet & & \bullet & & \end{matrix}$

(Parents: Reading the problem to your child is ALWAYS okay. If you help them solve the problems, please initial the problem and they will receive partial credit.)